


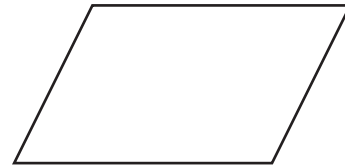
# Quadrilaterals

**Square**

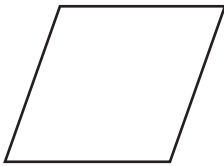
There are four right angles. All sides are the same length.

**Rectangle**

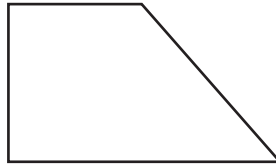
There are four right angles.

**Parallelogram**

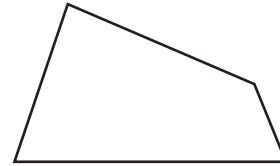
Opposite sides are parallel.

**Rhombus**

Opposite sides are parallel and all sides are the same length.

**Trapezoid**

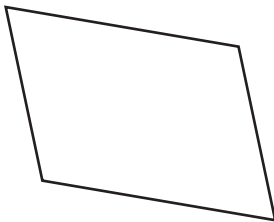
There is only one pair of parallel sides.

**Quadrilateral**

A polygon with 4 sides.

Write the name of each quadrilateral.

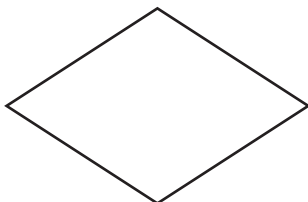
1.



2.



3.



4.

